
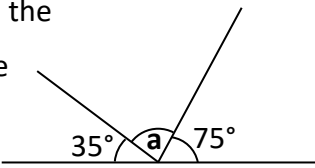
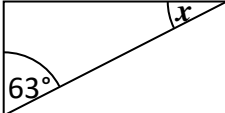


Name: _____

Date: _____

Class/Group: _____

A: Place Value, Add and Subtract		B: Multiply, Divide and Fractions		C: Fractions and Geometry	
1. What is the value of the 3 in this number? 1,348,567	^{5:1} 300,000	11. Circle all the multiples of 16. 16 22 28 32	^{5:8} 16, 32	21. A bag of flour weighed 2.25 kilograms.	^{5:18} 1.525
2. Write six hundred and eighteen thousand and twelve in digits.	^{5:1} 618,012	12. Circle the composite (non-prime) numbers? 2 4 6 9 11	^{5:9} 4, 6, 9	0.725 kilograms are used in a recipe. How many kilograms of flour are left?	
3. Round 247,599 to the nearest hundred thousand .	^{5:2} 200,000	13. 4,962 ÷ 6	^{5:10} 827	22. Which of these is the largest? a. $\frac{12}{25}$ b. 40% c. 0.55	^{5:19} 0.55
4. What is the missing number? 328,935 428,935 <input type="text"/> 628,935	^{5:2} 528,935	14. 670.2 x 10	^{5:11} 6,702		
5. Find the difference in temperatures. London -3°C Glasgow -10°C	^{5:3} 7°C	15. Complete this sequence of cube numbers . 1 8 27 <input type="text"/>	^{5:12} 64	23. Draw an angle of 75°	^{5:25} Angle drawn
6. Write this number in Roman Numerals: 349	^{5:4} CCCXLIX	16. Write <, = or > to make this correct: $\frac{4}{7}$ <input type="text"/> $\frac{12}{21}$	^{5:13} =		
7. 9,250 – 6,895 =	^{5:5} 2,355	17. Find an equivalent fraction of $\frac{60}{100}$. 	^{5:14} $\frac{6}{10}$ or $\frac{12}{20}$	24. Calculate the missing angle labelled a:	^{5:26} 70°
8. 18,394 + 9,824 =	^{5:5} 28,218	18. Write $3\frac{4}{5}$ as an improper fraction .	^{5:15} $\frac{19}{5}$		
9. Complete this sum without written working. 16,800 – 2,400 =	^{5:6} 14,400	19. $\frac{5}{9} \times 18 =$	^{5:16} 10	25. A diagonal has been drawn through this rectangle.	^{5:27} 27°
10. 27,487 seats out of 35,000 are taken. How many are empty?	^{5:7} 7,513	20. Round 3.29 to the nearest whole number.	^{5:17} 3	Calculate the angle labelled x. 	
Total (A)		Total (B)		Total (C)	
Test Total (A+B+C)		R (0-9)		Y (10-19)	
				G (20-25)	